

Name: \_\_\_\_\_ Class: \_\_\_\_\_

## Pre-Test

I. Match the words on the left with the correct music sign on the right.  
Put the letter in the blank.

\_\_\_\_\_ 1. Treble Clef

\_\_\_\_\_ 2. Repeat Sign

\_\_\_\_\_ 3. Half Note

\_\_\_\_\_ 4. Quarter Note

\_\_\_\_\_ 5. Whole Note

\_\_\_\_\_ 6. Staff

\_\_\_\_\_ 7. Quarter Rest


\_\_\_\_\_ 8. Whole Rest

\_\_\_\_\_ 9. Half Rest


\_\_\_\_\_ 10. Eighth Notes

\_\_\_\_\_ 11. Time Signature


\_\_\_\_\_ 12. Tie




II. Write the correct letter name for these notes.



13. \_\_\_\_\_



14. \_\_\_\_\_



15. \_\_\_\_\_

III. Write the seven letters of the musical alphabet.

\_\_\_\_\_

Name: \_\_\_\_\_ Class: \_\_\_\_\_

## Post-Test

I. Match the words on the left with the correct music sign on the right.  
Put the letter in the blank.

\_\_\_\_\_ 1. Treble Clef

\_\_\_\_\_ 2. Repeat Sign

\_\_\_\_\_ 3. Half Note

\_\_\_\_\_ 4. Quarter Note

\_\_\_\_\_ 5. Whole Note

\_\_\_\_\_ 6. Staff

\_\_\_\_\_ 7. Quarter Rest


\_\_\_\_\_ 8. Whole Rest

\_\_\_\_\_ 9. Half Rest


\_\_\_\_\_ 10. Eighth Notes

\_\_\_\_\_ 11. Time Signature

\_\_\_\_\_ 12. Tie



II. Write the correct letter name for these notes.



13. \_\_\_\_\_ 14. \_\_\_\_\_ 15. \_\_\_\_\_ 16. \_\_\_\_\_ 17. \_\_\_\_\_ 18. \_\_\_\_\_

III. What notes do these pictures show?



19. \_\_\_\_\_















20. \_\_\_\_\_


Name: \_\_\_\_\_ Class: \_\_\_\_\_

## Post-Test

I. Fill in the blank with the name of the music sign on the right.



1. _____	
2. _____	
3. _____	
4. _____	
5. _____	
6. _____	
7. _____	
8. _____	
9. _____	
10. _____	
11. _____	
12. _____	

II. Write the correct letter name for these notes.



13. \_\_\_\_\_ 14. \_\_\_\_\_ 15. \_\_\_\_\_ 16. \_\_\_\_\_ 17. \_\_\_\_\_ 18. \_\_\_\_\_

III. What notes do these pictures show?

	19. _____		20. _____
---	-----------	---	-----------